
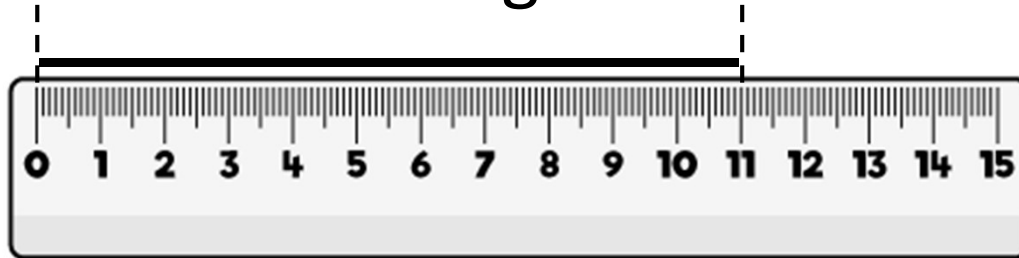


1) What is the length of the line?



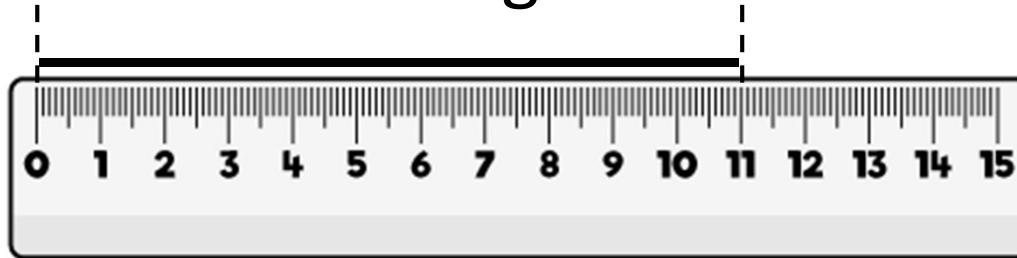
2) Max has 3 pencils. Sam has 5 times as many pencils.  
How many pencils has Sam got?

3)  $18 \div 3 = 6$


$180 \div 3 = \square$

4) Draw 708 using Base 10

1) What is the length of the line?




11 cm



2) Max has 3 pencils. Sam has 5 times as many pencils.  
How many pencils has Sam got? 15

3)  $18 \div 3 = 6$

$180 \div 3 =$



4) Draw 708 using Base 10